



STAFF SELECTION COMMISSION  
(Government of India)

### Combined Graduate Level Examination 2024 Tier II

|                |                                     |
|----------------|-------------------------------------|
| Roll Number    |                                     |
| Candidate Name |                                     |
| Venue Name     | iON Digital Zone iDZ 2 Mathura Road |
| Exam Date      | 20/01/2025                          |
| Exam Time      | 9:00 AM - 12:00 PM                  |
| Subject        | CGLE 2024 Tier II Paper I           |

Section : **Module I Mathematical Abilities**

**Q.1** ABCD is a quadrilateral in which diagonal  $BD = 70$  cm, AI

- Ans ☒ 1. 1320  
☒ 2. 1310  
☒ 3. 1330  
☒ 4. 1300

Question ID : **630680533606**  
Option 1 ID : **6306802085899**  
Option 2 ID : **6306802085898**  
Option 3 ID : **6306802085900**  
Option 4 ID : **6306802085897**  
Status : **Answered**  
Chosen Option : **3**

**Q.2** A tank when full can be emptied by an outlet pipe A in 5.6 hours, while an inlet pipe B can fill the same empty tank in 7 hours. If pipes A and B are turned on alternatively for 1 hour each starting with pipe A when the tank is full, how long will it take to empty the tank?

- Ans ☒ 1. 56 hours  
☒ 2. 55 hours  
☒ 3. 48 hours  
☒ 4. 47 hours

Question ID : **630680262157**  
Option 1 ID : **6306801018275**  
Option 2 ID : **6306801018276**  
Option 3 ID : **6306801018278**  
Option 4 ID : **6306801018277**  
Status : **Answered**  
Chosen Option : **1**

**Q.3** If  $a : b = 2 : 3$ ,  $b : c = 5 : 7$ , then find the ratio  $c : a$ .

- Ans**
- ☒ 1.  $15 : 21$
  - ☒ 2.  $20 : 21$
  - ☒ 3.  $21 : 10$
  - ☒ 4.  $10 : 21$

Question ID : 630680631026  
Option 1 ID : 6306802470053  
Option 2 ID : 6306802470054  
Option 3 ID : 6306802470055  
Option 4 ID : 6306802470052  
Status : Answered  
Chosen Option : 3

**Q.4** In a circle centered at O, a diameter AB is extended to a point C outside the circle. CD is a tangent at point D on the circle. If  $CD = 7\sqrt{3}$  cm and  $\angle DBC = 120^\circ$ , then the length of the diameter of the circle is equal to:

- Ans**
- ☒ 1. 16 cm
  - ☒ 2. 20 cm
  - ☒ 3. 18 cm
  - ☒ 4. 14 cm

Question ID : 630680395271  
Option 1 ID : 6306801541293  
Option 2 ID : 6306801541295  
Option 3 ID : 6306801541294  
Option 4 ID : 6306801541292  
Status : Answered  
Chosen Option : 1

**Q.5** If  $x = 4 + \sqrt{6}$  and  $y = 4 - \sqrt{6}$  then the value of  $x^2 + y^2$  is:

- Ans**
- ☒ 1. 51
  - ☒ 2. 42
  - ☒ 3. 44
  - ☒ 4. 43

Question ID : 630680677632  
Option 1 ID : 6306802653984  
Option 2 ID : 6306802653986  
Option 3 ID : 6306802653983  
Option 4 ID : 6306802653985  
Status : Answered  
Chosen Option : 3

Q.6 If  $\cos 27^\circ = \frac{p}{q}$ , then find the value of  $\operatorname{cosec} 27^\circ - \cos 63^\circ$ .

Ans

- ☒ 1.  $\frac{p}{q\sqrt{q^2 - p^2}}$
- ☒ 2.  $\frac{p^2}{q\sqrt{q^2 - p^2}}$
- ☒ 3.  $\frac{q}{p\sqrt{q^2 - p^2}}$
- ☒ 4.  $\frac{q^2}{p\sqrt{q^2 - p^2}}$

Question ID : 630680764496

Option 1 ID : 6306802996525

Option 2 ID : 6306802996522

Option 3 ID : 6306802996524

Option 4 ID : 6306802996523

Status : Answered

Chosen Option : 2

Q.7 The average of first 92 even numbers is

Ans

- ☒ 1. 94
- ☒ 2. 92
- ☒ 3. 93
- ☒ 4. 91

Question ID : 630680657227

Option 1 ID : 6306802572853

Option 2 ID : 6306802572851

Option 3 ID : 6306802572850

Option 4 ID : 6306802572852

Status : Answered

Chosen Option : 3

Q.8 Simplify  $(5z - 7y)^2 + (7z + 5y)^2 - 49z^2$

Ans

- ☒ 1.  $30z^2 + 83y^2$
- ☒ 2.  $35z^2 + 70y^2$
- ☒ 3.  $26z^2 + 82y^2$
- ☒ 4.  $25z^2 + 74y^2$

Question ID : 630680674735

Option 1 ID : 6306802642387

Option 2 ID : 6306802642388

Option 3 ID : 6306802642386

Option 4 ID : 6306802642385

Status : Answered

Chosen Option : 4

Q.9 Let PQR be a right angled triangle, right-angled at R. Let PQ = 29 cm, QR = 21 cm and  $\angle Q = \theta$ . Find the value of  $\cos^2 \theta - \sin^2 \theta$ .

Ans

✓ 1.  $\frac{41}{841}$

✗ 2.  $\frac{841}{41}$

✗ 3.  $\frac{840}{40}$

✗ 4.  $\frac{40}{840}$

Question ID : 630680526625

Option 1 ID : 6306802058568

Option 2 ID : 6306802058569

Option 3 ID : 6306802058566

Option 4 ID : 6306802058567

Status : Answered

Chosen Option : 1

Q.10  $\frac{(a^5 \times b^3 \times c^7)}{(a^4 \times b^8 \times c^9)}$  in simplified form is:

Ans

✗ 1.  $(a^{-1}) \times (b^4) \times (c^{-5})$

✓ 2.  $(a^1) \times (b^{-5}) \times (c^{-2})$

✗ 3.  $(a^{-3}) \times (b^{-10}) \times (c^{-4})$

✗ 4.  $(a^6) \times (b^6) \times (c^{-4})$

Question ID : 630680677918

Option 1 ID : 6306802655130

Option 2 ID : 6306802655127

Option 3 ID : 6306802655128

Option 4 ID : 6306802655129

Status : Answered

Chosen Option : 2

Q.11 Which number among 38211, 38121, 32118, and 31128 is divisible by 24?

Ans

✗ 1. 32118

✗ 2. 38121

✗ 3. 38211

✓ 4. 31128

Question ID : 630680650350

Option 1 ID : 6306802546405

Option 2 ID : 6306802546404

Option 3 ID : 6306802546403

Option 4 ID : 6306802546406

Status : Answered

Chosen Option : 4

Q.12 P and Q take part in 400 m race. P runs at 12 km/hr. P gives Q a start of 20 m and still beats him by 13 seconds. The speed of Q is:  
(Round up to two decimal places.)

- Ans ☐ 1. 10.87 km/hr  
☒ 2. 10.29 km/hr  
☐ 3. 11.38 km/hr  
☐ 4. 11.61 km/hr

Question ID : 630680528052  
Option 1 ID : 6306802064234  
Option 2 ID : 6306802064233  
Option 3 ID : 6306802064235  
Option 4 ID : 6306802064236  
Status : Answered  
Chosen Option : 2

Q.13 The ratio of the ages of two friends is 4 : 3 which will become 6 : 5 after 4 years. What will be the sum of their ages (in years) after 22 years from now?

- Ans ☐ 1. 50  
☐ 2. 52  
☐ 3. 56  
☒ 4. 58

Question ID : 630680641023  
Option 1 ID : 6306802509504  
Option 2 ID : 6306802509505  
Option 3 ID : 6306802509506  
Option 4 ID : 6306802509507  
Status : Answered  
Chosen Option : 4

Q.14 If  $\sin A = \frac{5}{13}$ , then find the value of  $\frac{\cos A - 2 \tan A}{\sin A + 3 \tan A}$ .

- Ans ☐ 1.  $\frac{11}{255}$   
☐ 2.  $\frac{13}{255}$   
☐ 3.  $\frac{12}{255}$   
☒ 4.  $\frac{14}{255}$

Question ID : 630680674270  
Option 1 ID : 6306802640599  
Option 2 ID : 6306802640601  
Option 3 ID : 6306802640600  
Option 4 ID : 6306802640602  
Status : Answered  
Chosen Option : 4

Q.15 A man sells a mobile phone for ₹680 and loses something. If he had sold it for ₹1070, his gain would have been double the former loss. The cost price (in ₹) of the mobile phone is:

- Ans
- ☒ 1. 820
  - ☒ 2. 830
  - ☒ 3. 810
  - ☒ 4. 800

Question ID : 630680633558

Option 1 ID : 6306802480129

Option 2 ID : 6306802480131

Option 3 ID : 6306802480128

Option 4 ID : 6306802480130

Status : Answered

Chosen Option : 3

Q.16 If the diameter of the base of a cone is 56 cm and its curved surface area is 3080 cm<sup>2</sup>, then what will be its volume (in cm<sup>3</sup>)? (Use  $\pi = 22/7$ )

- Ans
- ☒ 1. 12250
  - ☒ 2. 14670
  - ☒ 3. 17248
  - ☒ 4. 15391

Question ID : 630680671154

Option 1 ID : 6306802628177

Option 2 ID : 6306802628178

Option 3 ID : 6306802628180

Option 4 ID : 6306802628179

Status : Answered

Chosen Option : 3

Q.17 If A and B are two events such that  $P(A \cup B) = \frac{3}{4}$ ,  $P(A \cap B) = \frac{1}{4}$

- Ans
- ☒ 1. Independent
  - ☒ 2. Not Mutually Exclusive
  - ☒ 3. Dependent
  - ☒ 4. Mutually Exclusive

Question ID : 630680531511

Option 1 ID : 6306802077837

Option 2 ID : 6306802077840

Option 3 ID : 6306802077838

Option 4 ID : 6306802077839

Status : Answered

Chosen Option : 2

Q.18 Find the median of the following data.

Class interval 0 – 20 20 – 40 40 – 60 60 – 80 80 – 100  
Frequency 9 16 24 15 4

- Ans ☒ 1. 55  
☒ 2. 50  
☒ 3. 58  
☒ 4. 47.5

Question ID : 630680531337  
Option 1 ID : 6306802077158  
Option 2 ID : 6306802077157  
Option 3 ID : 6306802077160  
Option 4 ID : 6306802077159  
Status : Answered  
Chosen Option : 4

Q.19 Two years ago, the population of a town was 9487500. Due to migration to big cities, it decreases every year at the rate of 8%. The present population of the town is:

- Ans ☒ 1. 8070120  
☒ 2. 8030220  
☒ 3. 9060110  
☒ 4. 7060320

Question ID : 630680464564  
Option 1 ID : 6306801814293  
Option 2 ID : 6306801814291  
Option 3 ID : 6306801814292  
Option 4 ID : 6306801814294  
Status : Not Answered  
Chosen Option : --

Q.20 Adi and Dia together have ₹1,440. If  $\frac{3}{10}$  of Adi's amount is equal to  $\frac{3}{5}$  of Dia's amount, how much amount does Dia have?

- Ans ☒ 1. ₹464  
☒ 2. ₹540  
☒ 3. ₹512  
☒ 4. ₹480

Question ID : 630680543918  
Option 1 ID : 6306802126459  
Option 2 ID : 6306802126462  
Option 3 ID : 6306802126461  
Option 4 ID : 6306802126460  
Status : Answered  
Chosen Option : 4

Q.21 The LCM of  $2^3 \times 9^2 \times 13$ ,  $2^2 \times 13^2 \times 19$  and  $9^3 \times 13^2 \times 19^2$  is:

- Ans ☒ 1.  $2^3 \times 9^3 \times 13^2 \times 19^2$
- ☐ 2.  $2^2 \times 9^3 \times 13 \times 19^2$
- ☐ 3.  $2^2 \times 9^2 \times 13^2 \times 19^3$
- ☐ 4.  $2^3 \times 9^2 \times 13^2 \times 19$

Question ID : 630680677308

Option 1 ID : 6306802652687

Option 2 ID : 6306802652688

Option 3 ID : 6306802652690

Option 4 ID : 6306802652689

Status : Answered

Chosen Option : 1

Q.22 8 kg of maize costing ₹51 per kg, is mixed with 9 kg of maize costing ₹68 per kg. The average per kg price of mixed maize is:

- Ans ☒ 1. ₹60
- ☐ 2. ₹61
- ☐ 3. ₹59
- ☐ 4. ₹58

Question ID : 630680669017

Option 1 ID : 6306802619574

Option 2 ID : 6306802619575

Option 3 ID : 6306802619573

Option 4 ID : 6306802619576

Status : Answered

Chosen Option : 1

Q.23 Find the simple interest (in ₹) on ₹2000 at 6.5% per annum rate of interest for the period from 13 February 2023 to 27 April 2023

- Ans ☐ 1. 24
- ☐ 2. 25
- ☒ 3. 26
- ☐ 4. 27

Question ID : 630680666475

Option 1 ID : 6306802609463

Option 2 ID : 6306802609461

Option 3 ID : 6306802609460

Option 4 ID : 6306802609462

Status : Answered

Chosen Option : 3



Q.24 The age of some students is given in years as 12, 13, 16, 18, 14, 19, 13, 17, 15 and 11. The median age (in years) of the students is:

- Ans ☒ 1. 14  
☒ 2. 14.5  
☒ 3. 13.5  
☒ 4. 15

Question ID : 630680543949  
Option 1 ID : 6306802126584  
Option 2 ID : 6306802126586  
Option 3 ID : 6306802126583  
Option 4 ID : 6306802126585  
Status : Answered  
Chosen Option : 2

Q.25 Murlidhar, the owner of a grocery store, offers a discount scheme 'buy 5 water bottles get 1 for free' to his customers. What is the effective percentage discount offered by Murlidhar? (correct up to two decimal places)

- Ans ☒ 1. 13.33%  
☒ 2. 16.67%  
☒ 3. 13.67%  
☒ 4. 20.00%

Question ID : 630680653718  
Option 1 ID : 6306802559286  
Option 2 ID : 6306802559288  
Option 3 ID : 6306802559287  
Option 4 ID : 6306802559289  
Status : Answered  
Chosen Option : 2

Q.26 The present ages of Sweeta and Suman are in the ratio 4 : 5

- Ans ☒ 1. 8 years  
☒ 2. 12 years  
☒ 3. 20 years  
☒ 4. 16 years

Question ID : 630680533803  
Option 1 ID : 6306802086687  
Option 2 ID : 6306802086688  
Option 3 ID : 6306802086689  
Option 4 ID : 6306802086690  
Status : Answered  
Chosen Option : 2

**Q.27** Amit gets 6% increase in his sale amount in the first year and 20% in the second year, with that his present sale is ₹254400, what was his sale (in ₹) two years ago?

- Ans** ☒ 1. 240000  
☒ 2. 180000  
☒ 3. 200000  
☒ 4. 212000

Question ID : 630680667634

Option 1 ID : 6306802614098

Option 2 ID : 6306802614099

Option 3 ID : 6306802614096

Option 4 ID : 6306802614097

Status : Answered

Chosen Option : 3

**Q.28** Akshay places three identical rings of diameter 21 cm in such a manner that each one touches the other two rings. He observes that there is a space enclosed by the circles. What is the area (in cm<sup>2</sup>) of this portion? (Take  $\pi = \frac{22}{7}$ )

Note – Rounded off to nearest 2 decimal places and  $\sqrt{3} = 1.732$

- Ans** ☒ 1. 20.65  
☒ 2. 17.70  
☒ 3. 18.25  
☒ 4. 24.12

Question ID : 630680407097

Option 1 ID : 6306801587332

Option 2 ID : 6306801587331

Option 3 ID : 6306801587330

Option 4 ID : 6306801587333

Status : Answered

Chosen Option : 1

**Q.29** In a circle with centre O, an arc ABC subtends an angle of 134° at the centre of the circle. The chord AB is produced to a point P.  $\angle CBP$  is equal to:

- Ans** ☒ 1. 45°  
☒ 2. 67°  
☒ 3. 89°  
☒ 4. 113°

Question ID : 630680671357

Option 1 ID : 6306802628984

Option 2 ID : 6306802628983

Option 3 ID : 6306802628982

Option 4 ID : 6306802628981

Status : Answered

Chosen Option : 2

**Q.30** The ratio between the length and the breadth of a rectangular park is 3 : 2, and the perimeter of the park is 120 m. Find the area (in m<sup>2</sup>) of the park.

- Ans ☒ 1. 968  
☒ 2. 454  
☒ 3. 144  
☒ 4. 864

Question ID : 630680590901

Option 1 ID : 6306802312074

Option 2 ID : 6306802312072

Option 3 ID : 6306802312071

Option 4 ID : 6306802312073

Status : Answered

Chosen Option : 4

Section : Module II Reasoning and General Intelligence

**Q.1** Identify the figure given in the options which when put in place of the question mark (?) will logically complete the series.

|   |   |   |   |   |   |   |
|---|---|---|---|---|---|---|
| A | B | A | D | A | D |   |
|   | ↑ | D | → | B | C | ← |
| D | C | C | ↓ | C | B | B |
|   |   |   |   |   |   | ? |

Ans

- ☒ 1. 

|   |   |
|---|---|
| B | C |
|   | ↓ |
| A | D |
- ☒ 2. 

|   |   |
|---|---|
| C | D |
|   | ↑ |
| B | A |
- ☒ 3. 

|   |   |
|---|---|
| A | B |
|   | ↑ |
| D | C |
- ☒ 4. 

|   |   |
|---|---|
| C | D |
|   | → |
| B | A |

Question ID : 630680542579

Option 1 ID : 6306802121252

Option 2 ID : 6306802121251

Option 3 ID : 6306802121249

Option 4 ID : 6306802121250

Status : Answered

Chosen Option : 2

**Q.2** A question is followed by two statements numbered (I) and (II). You have to decide whether the data provided in the statements are sufficient to answer the question. Read both the statements and select the appropriate option.

**Question:**

Shourya delivered parcels to five locations A, B, C, D and E while prioritising delivery of heavier parcels first. Which location was delivered in the end?

**Statements:**

(I) The parcel for location C was heavier than all other parcels.

(II) The parcel for location D was lighter than the parcels assigned to locations B and A.

**Ans** ☒ 1. Data in statements (I) and (II) together are sufficient to answer the question.

☒ 2. Data in statement (II) alone is sufficient to answer the question, whereas data in statement (I) alone is not.

☒ 3. Data in statement (I) alone is sufficient to answer the question, whereas data in statement (II) alone is not.

☒ 4. Data in statements (I) and (II) together are not sufficient to answer the question.

Question ID : **630680560993**

Option 1 ID : **6306802192979**

Option 2 ID : **6306802192978**

Option 3 ID : **6306802192977**

Option 4 ID : **6306802192980**

Status : **Answered**

Chosen Option : **4**

**Q.3** Read the following information and answer the question which follows.

"Like seasoned gardeners, Gardener G practices crop rotation to maintain soil fertility, leading to thriving and diverse plant growth."

Which of the following can be inferred from the given statement? (An inference is something which is not directly stated but can be derived from the given facts/information in the statement)

1. The thriving and diverse plant growth in Gardener G's garden is likely influenced by the practice of crop rotation.

2. Gardener G is consulted by other gardeners in the area for best gardening practices.

**Ans** ☒ 1. Only (I) can be inferred.

☒ 2. Both (I) and (II) can be inferred.

☒ 3. Only (II) can be inferred.

☒ 4. Neither (I) nor (II) can be inferred.

Question ID : **630680557214**

Option 1 ID : **6306802177835**

Option 2 ID : **6306802177838**

Option 3 ID : **6306802177836**

Option 4 ID : **6306802177837**

Status : **Answered**

Chosen Option : **1**

**Q.4** Four number-pairs have been given, out of which three are alike in some manner and one is different. Select the one that is different.  
(NOTE: Operations should be performed on the whole numbers, without breaking down the numbers into their constituent digits. E.g. 13 – Operations on 13 such as adding/subtracting/multiplying etc. to 13 can be performed. Breaking down 13 into 1 and 3 and then performing mathematical operations on 1 and 3 is not allowed.)

- Ans ☒ 1. 286 - 11  
☒ 2. 104 - 4  
☒ 3. 494 - 19  
☒ 4. 521 - 20

Question ID : 630680162457

Option 1 ID : 630680629126

Option 2 ID : 630680629125

Option 3 ID : 630680629124

Option 4 ID : 630680629127

Status : Not Attempted and  
Marked For Review

Chosen Option : --

**Q.5** In a certain code language, 'CURB' is coded as '3517' and 'BOAT' is coded as '4638'. What is the code for 'B' in the given code language?

- Ans ☒ 1. 4  
☒ 2. 8  
☒ 3. 3  
☒ 4. 7

Question ID : 630680681052

Option 1 ID : 6306802667422

Option 2 ID : 6306802667424

Option 3 ID : 6306802667421

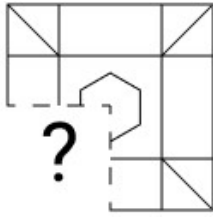
Option 4 ID : 6306802667423

Status : Answered

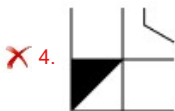
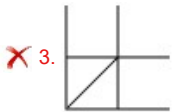
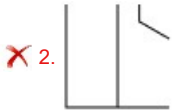
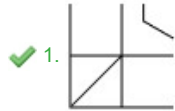
Chosen Option : 1

Exam stock

Q.6 Select the option figure that will replace the question mark (?) in the figure given below to complete the pattern.



Ans



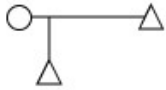
Question ID : 630680684120  
 Option 1 ID : 6306802679241  
 Option 2 ID : 6306802679239  
 Option 3 ID : 6306802679238  
 Option 4 ID : 6306802679240

Status : Answered

Chosen Option : 1

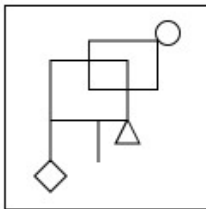
Exam stock

Q.7 Select the option figure in which the given figure is embedded as its part (rotation is NOT allowed).

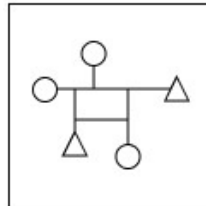


Ans

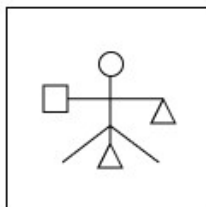
✗ 1.



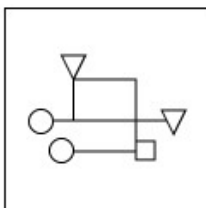
✓ 2.



✗ 3.



✗ 4.



Question ID : 630680629189

Option 1 ID : 6306802462841

Option 2 ID : 6306802462838

Option 3 ID : 6306802462840

Option 4 ID : 6306802462839

Status : Answered

Chosen Option : 2

Q.8 What will come in the place of the question mark (?) in the following equation, if '+' and '-' are interchanged and 'x' and '÷' are interchanged?

$$98 \div 7 + 288 \times 2 - 144 \times 3 - 152 \div 2 + 120 = ?$$

Ans ✓ 1. 774

✗ 2. 671

✗ 3. 632

✗ 4. 743

Question ID : 6306801081307

Option 1 ID : 6306804246806

Option 2 ID : 6306804246804

Option 3 ID : 6306804246803

Option 4 ID : 6306804246805

Status : Answered

Chosen Option : 1

**Q.9** Select the number from among the given options that can replace the question mark (?) in the following series.  
98, 50, 26, 14, ?, 5

- Ans ☒ 1. 10  
☒ 2. 7  
☒ 3. 6  
☒ 4. 8

Question ID : 630680172611

Option 1 ID : 630680668867

Option 2 ID : 630680668865

Option 3 ID : 630680668866

Option 4 ID : 630680668864

Status : Answered

Chosen Option : 4

**Q.10** How many six-lettered meaningful words can be formed using all these letters but each letter only once in the word.

R F I  
G E D

- Ans ☒ 1. One  
☒ 2. Four  
☒ 3. Three  
☒ 4. Two

Question ID : 630680519581

Option 1 ID : 6306802030748

Option 2 ID : 6306802030751

Option 3 ID : 6306802030750

Option 4 ID : 6306802030749

Status : Not Attempted and  
Marked For Review

Chosen Option : --

**Q.11** Select the correct option that indicates the arrangement of the following words in a logical and meaningful order.

1. Set goals 2. Budget 3. Review 4. Invest 5. Assess

- Ans ☒ 1. 1, 5, 2, 4, 3  
☒ 2. 5, 2, 4, 3, 1  
☒ 3. 3, 5, 1, 2, 4  
☒ 4. 5, 1, 2, 3, 4

Question ID : 630680523400

Option 1 ID : 6306802045778

Option 2 ID : 6306802045779

Option 3 ID : 6306802045780

Option 4 ID : 6306802045781

Status : Answered

Chosen Option : 1



**Q.12** A question is given, followed by two statements labelled I and II. Identify which of the statements is/are sufficient to answer the question.

**Question:**

Five houses of five different colours (blue, green, yellow, red and violet), with equal space between every two adjacent houses, are constructed in a row facing north. Which coloured house is exactly in the middle of the row?

**Statements:**

(I) Green and yellow coloured houses are constructed at the extreme ends of the row.

(II) Violet and blue coloured houses are immediate neighbouring houses of green and yellow coloured houses, respectively.

- Ans**
- ☒ 1. Data in Statements I and II together is not sufficient to answer the question
  - ☒ 2. Data in Statement I alone is sufficient to answer the question while data in Statement II is not
  - ☒ 3. Data in Statement II alone is sufficient to answer the question while data in Statement I is not
  - ☒ 4. Data in Statements I and II together is sufficient to answer the question

Question ID : 630680560981

Option 1 ID : 6306802192932

Option 2 ID : 6306802192929

Option 3 ID : 6306802192930

Option 4 ID : 6306802192931

Status : Answered

Chosen Option : 4

**Q.13** In a certain code language,  
P + Q means 'P is the mother of Q',  
P – Q means 'P is the brother of Q',  
P x Q means 'P is the wife of Q' and  
P ÷ Q means 'P is the father of Q'.  
Based on the above, how is U related to Z if 'U – V + W ÷ Y x Z'?

- Ans**
- ☒ 1. Wife's Father's Mother's Brother
  - ☒ 2. Wife's Mother's Mother's Brother
  - ☒ 3. Wife's Mother's Mother's Father
  - ☒ 4. Wife's Father's Mother's Father

Question ID : 630680681067

Option 1 ID : 6306802667481

Option 2 ID : 6306802667483

Option 3 ID : 6306802667484

Option 4 ID : 6306802667482

Status : Answered

Chosen Option : 2

Q.14 Given below is a statement (Cause) followed by possible effects numbered I, II and III. Read the 'Cause' carefully and decide which of the three can be possible effect/s.

Cause – Heavy rains yesterday in City X have caused flooding in many areas including the railway station and airport.

Effect I – Railways has announced a delay in the departure of three trains scheduled to start from City X this morning.

Effect II – A number of flights were unable to land in the airport of City X last evening.

Effect III – Finance ministry has extended the date for filing tax returns by a month.

- Ans ☐ 1. Only II is a possible effect.  
☐ 2. Both II and III are possible effects.  
☒ 3. Both I and II are possible effects.  
☐ 4. Only I is a possible effect.

Question ID : 630680568505  
Option 1 ID : 6306802222838  
Option 2 ID : 6306802222839  
Option 3 ID : 6306802222840  
Option 4 ID : 6306802222837  
Status : Answered  
Chosen Option : 3

Q.15 Paras ranked 5<sup>th</sup> from the top and 24<sup>th</sup> from the bottom in his class. How many students are there in his class?

- Ans ☐ 1. 27  
☐ 2. 26  
☐ 3. 29  
☒ 4. 28

Question ID : 630680635342  
Option 1 ID : 6306802487251  
Option 2 ID : 6306802487252  
Option 3 ID : 6306802487250  
Option 4 ID : 6306802487249  
Status : Answered  
Chosen Option : 4

Q.16 Which of the following letter-clusters should replace # and % so that the pattern and relationship followed between the letter-cluster pair on the left side of :: is the same as that on the right side of ::?

# : ORW :: RUZ : %

- Ans ☐ 1. # = UYD % = KNS  
☐ 2. # = VYD % = LNS  
☒ 3. # = VYD % = KNS  
☐ 4. # = VYD % = KNK

Question ID : 630680731373  
Option 1 ID : 6306802866186  
Option 2 ID : 6306802866187  
Option 3 ID : 6306802866185  
Option 4 ID : 6306802866184  
Status : Answered  
Chosen Option : 3

**Q.17** In a certain code language,  
 $A + B$  means 'A is the mother of B',  
 $A - B$  means 'A is the brother of B',  
 $A \times B$  means 'A is the wife of B' and  
 $A \div B$  means 'A is the father of B'.  
 Based on the above, how is U related to Z if ' $U - V \times W \div Y + Z$ '?

- Ans** ☒ 1. Mother's father's father  
☒ 2. Mother's father's brother  
☒ 3. Mother's mother's brother  
☒ 4. Mother's mother's father

Question ID : 630680681073

Option 1 ID : 6306802667508

Option 2 ID : 6306802667507

Option 3 ID : 6306802667505

Option 4 ID : 6306802667506

Status : Answered

Chosen Option : 3

**Q.18** Select the correct mirror image of the given combination when the mirror is placed at line MN as shown.

4BvGF72  
 M  
 N

- Ans** ☒ 1. 27GFvB4  
☒ 2. 4BvGF72  
☒ 3. 72GFvB4  
☒ 4. 27GFvB4

Question ID : 630680619813

Option 1 ID : 6306802425388

Option 2 ID : 6306802425385

Option 3 ID : 6306802425386

Option 4 ID : 6306802425387

Status : Answered

Chosen Option : 4

**Q.19** Seven people A, B, C, D, E, F and G, scored different marks (out of 100) in an exam. G scored the lowest marks. B scored second highest marks, which were 80. A scored 72. E scored more than F but less than C. Marks scored by C were a multiple of 11 and less than 70. The sum of marks scored by C and F was 120. What is the score of F?

- Ans** ☒ 1. 56  
☒ 2. 50  
☒ 3. 54  
☒ 4. 55

Question ID : 630680416338

Option 1 ID : 6306801624118

Option 2 ID : 6306801624115

Option 3 ID : 6306801624117

Option 4 ID : 6306801624116

Status : Answered

Chosen Option : 2

Q.20 Each of the digits in the number 3571869 is arranged in ascending order from left to right. The position(s) of how many digits will remain unchanged as compared to that/those in the original number?

- Ans ☐ 1. Two  
☒ 2. One  
☐ 3. None  
☐ 4. Three

Question ID : 630680674149

Option 1 ID : 6306802640125

Option 2 ID : 6306802640124

Option 3 ID : 6306802640123

Option 4 ID : 6306802640126

Status : Answered

Chosen Option : 2

Q.21 Three of the following four pairs are alike in a certain way and thus form a group. Which is the pair that does not belong to that group?

- Ans ☐ 1. ₹¥\$£ - Currency  
☐ 2. ABCD - Letters  
☒ 3. x+--+ - Text  
☐ 4. 1234 - Numbers

Question ID : 630680510706

Option 1 ID : 6306801995957

Option 2 ID : 6306801995955

Option 3 ID : 6306801995956

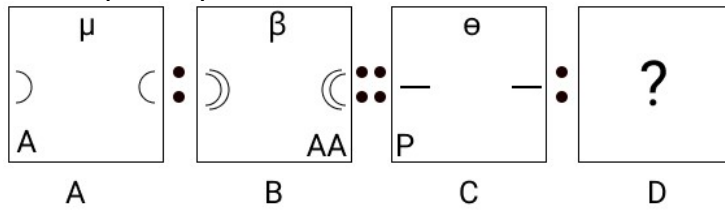
Option 4 ID : 6306801995954

Status : Answered

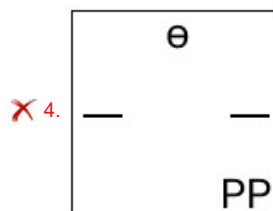
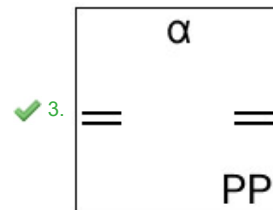
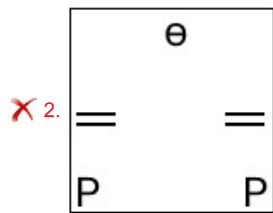
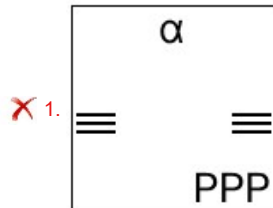
Chosen Option : 3

Exam stock

Q.22 Figure A is related to B in a certain pattern. Following the same pattern, figure C is related to D. Study the pattern and select the figure which should be placed in place of D.



Ans



Question ID : 630680531597  
 Option 1 ID : 6306802078187  
 Option 2 ID : 6306802078188  
 Option 3 ID : 6306802078185  
 Option 4 ID : 6306802078186

Status : Answered  
 Chosen Option : 3

**Q.23** Read the given statements and conclusions carefully. Assuming that the information given in the statements is true, even if it appears to be at variance with commonly known facts, decide which of the given conclusion(s) logically follow(s) from the statements.

**Statements:**

All dolls are robots.  
Some robots are toys.  
Some toys are cycles.

**Conclusions:**

(I) Some toys are dolls.  
(II) No cycle is a robot.

- Ans** ☒ 1. Only conclusion (II) is true.  
☒ 2. Only conclusion (I) is true.  
☒ 3. Both conclusions (I) and (II) are true.  
☒ 4. Neither conclusion (I) nor (II) is true.

Question ID : 630680625021

Option 1 ID : 6306802446246

Option 2 ID : 6306802446245

Option 3 ID : 6306802446248

Option 4 ID : 6306802446247

Status : Answered

Chosen Option : 4

**Q.24** In this question, a statement is followed by two courses of action, numbered I and II. You must assume everything in the statement to be true and on the basis of the information given in the statement, decide which of the course of action/s logically follows for pursuing.

**Statement:** Many people have complained to the Finance Ministry regarding a delay in receiving refunds of their Income Tax returns.

**Courses of action:**

The Finance Ministry must institute an enquiry into the complaints received regarding delay in income tax refunds.

The Finance Ministry must compensate the income tax payees by paying interest on their refunds for the duration of the delay.

- Ans** ☒ 1. Neither I nor II follows.  
☒ 2. Only I follows.  
☒ 3. Both I and II follow.  
☒ 4. Only II follows.

Question ID : 630680568512

Option 1 ID : 6306802222867

Option 2 ID : 6306802222865

Option 3 ID : 6306802222868

Option 4 ID : 6306802222866

Status : Answered

Chosen Option : 2

**Q.25** Select the correct mirror image of the given combination when the mirror is placed at line MN as shown.



- Ans**
- ☒ 1. 89MSƎ7A
  - ☒ 2. 8MƎSƎ7A
  - ☒ 3. 8M29Ǝ7A
  - ☒ 4. 8WƎZƎ7A

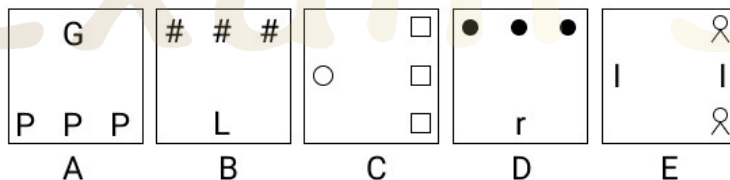
Question ID : 630680619808  
 Option 1 ID : 6306802425365  
 Option 2 ID : 6306802425367  
 Option 3 ID : 6306802425368  
 Option 4 ID : 6306802425366  
 Status : Answered  
 Chosen Option : 2

**Q.26** 17 is related to 159 following a certain logic. Following the same logic, 11 is related to 105. To which of the following is 13 related, following the same logic?  
 (NOTE : Operations should be performed on the whole numbers, without breaking down the numbers into its constituent digits. E.g. 13 – Operations on 13 such as adding /subtracting / multiplying etc. to 13 can be performed. Breaking down 13 into 1 and 3 and then performing mathematical operations on 1 and 3 is not allowed.)

- Ans**
- ☒ 1. 116
  - ☒ 2. 103
  - ☒ 3. 123
  - ☒ 4. 109

Question ID : 630680913344  
 Option 1 ID : 6306803578294  
 Option 2 ID : 6306803578292  
 Option 3 ID : 6306803578295  
 Option 4 ID : 6306803578293  
 Status : Answered  
 Chosen Option : 3

**Q.27** Four of the following five figures are alike in a certain way and thus form a group. Which is the one that does NOT belong to that group?



- Ans**
- ☒ 1. D
  - ☒ 2. B
  - ☒ 3. A
  - ☒ 4. E

Question ID : 630680653551  
 Option 1 ID : 6306802558620  
 Option 2 ID : 6306802558619  
 Option 3 ID : 6306802558618  
 Option 4 ID : 6306802558621  
 Status : Answered  
 Chosen Option : 4

**Q.28** In a certain code language, 'he enjoys music' is coded as 'lo po jo' and 'music and dance' is coded as 'kb jo fk'. How is 'music' coded in the given language?

- Ans**    ✓ 1. jo  
          ✗ 2. po  
          ✗ 3. lo  
          ✗ 4. fk

Question ID : 630680644316  
Option 1 ID : 6306802522572  
Option 2 ID : 6306802522574  
Option 3 ID : 6306802522571  
Option 4 ID : 6306802522573  
Status : Answered  
Chosen Option : 1

**Q.29** Select the correct option that indicates the arrangement of the following words in a logical and meaningful order.

1. Plant
2. Pollination
3. Seed
4. Seedling
5. Fruit

- Ans**    ✓ 1. 3, 4, 1, 2, 5  
          ✗ 2. 3, 4, 1, 5, 2  
          ✗ 3. 4, 1, 2, 5, 3  
          ✗ 4. 4, 3, 1, 2, 5

Question ID : 630680523399  
Option 1 ID : 6306802045774  
Option 2 ID : 6306802045777  
Option 3 ID : 6306802045775  
Option 4 ID : 6306802045776  
Status : Answered  
Chosen Option : 4

**Q.30** M, N, O, X, Y and Z are sitting around a circular table facing the centre (but not necessarily in the same order). O is an immediate neighbour of Y. Z sits second to the right of O. X is the immediate neighbour of both M and N. M is not an immediate neighbour of O. Who sits to the immediate left of Y?

- Ans**    ✗ 1. X  
          ✓ 2. O  
          ✗ 3. N  
          ✗ 4. M

Question ID : 630680416780  
Option 1 ID : 6306801625886  
Option 2 ID : 6306801625885  
Option 3 ID : 6306801625884  
Option 4 ID : 6306801625883  
Status : Answered  
Chosen Option : 2



Q.1 Select the option that expresses the given sentence in indirect speech.

He said, "I shall need a copy of the documents."

- Ans ☒ 1. He said that he will need a copy of the documents.  
☒ 2. He said that he shall need a copy of the document.  
☒ 3. He said that he is going to need a copy of the document.  
☒ 4. He said that he would need a copy of the documents.

Question ID : 630680627725

Option 1 ID : 6306802456996

Option 2 ID : 6306802456997

Option 3 ID : 6306802456998

Option 4 ID : 6306802456995

Status : Answered

Chosen Option : 2

Q.2 Sentences of a paragraph are given below. While the first and the last sentences (1 and 6) are in the correct order, the sentences in between are jumbled up. Arrange the sentences in the correct order to form a meaningful and coherent paragraph.

1. There are some backward areas in Andhra Pradesh.  
A. Rayalaseema is one of them.  
B. Massive degradation of natural resources and extensive changes in land use have resulted in poor crop productivity in Rayalaseema.  
C. The National Soil Survey and Land use planning organisation is doing its job by giving suggestions to the farmers of Rayalaseema.  
D. Soil Organic Carbon (SOC), which is crucial for maintaining soil quality, has decreased by 84% in the region. Poor soil fertility and soil degradation, like in Rayalaseema region, are the major causes of food shortage.  
6. The advice is about which crops are to be cultivated and which not.

- Ans ☒ 1. CBAD  
☒ 2. DCBA  
☒ 3. CDBA  
☒ 4. ABDC

Question ID : 630680196513

Option 1 ID : 630680762358

Option 2 ID : 630680762356

Option 3 ID : 630680762357

Option 4 ID : 630680762355

Status : Answered

Chosen Option : 4

Q.3 Select the most appropriate option that can substitute the underlined words in the given sentence.

The nation has chosen the government by the people over monarchy.

- Ans ☒ 1. democracy  
☒ 2. oligarchy  
☒ 3. theocracy  
☒ 4. autocracy

Question ID : 630680668932

Option 1 ID : 6306802619248

Option 2 ID : 6306802619245

Option 3 ID : 6306802619247

Option 4 ID : 6306802619246

Status : Answered

Chosen Option : 1

Q.4 Select the most appropriate ANTONYM of the given word.

Thrifty

- Ans ☒ 1. Extravagant  
☐ 2. Thankful  
☐ 3. Intolerant  
☐ 4. Indifferent

Question ID : 630680565685  
Option 1 ID : 6306802211677  
Option 2 ID : 6306802211676  
Option 3 ID : 6306802211679  
Option 4 ID : 6306802211678  
Status : Answered  
Chosen Option : 2

Q.5 Select the most appropriate idiom to fill in the blank.

A lot of people are still \_\_\_\_\_ over the GDP issue.

- Ans ☐ 1. over the fence  
☒ 2. sitting on the fence  
☐ 3. by the fence  
☐ 4. breaking a leg

Question ID : 630680333143  
Option 1 ID : 6306801295847  
Option 2 ID : 6306801295846  
Option 3 ID : 6306801295848  
Option 4 ID : 6306801295845  
Status : Answered  
Chosen Option : 3

Q.6 Select the most appropriate option to fill in the blank.

Prescription safety glasses provide the \_\_\_\_\_ tailored protection for individuals with vision correction needs.

- Ans ☐ 1. finer  
☐ 2. more finely  
☒ 3. finest  
☐ 4. fine

Question ID : 630680596034  
Option 1 ID : 6306802332320  
Option 2 ID : 6306802332321  
Option 3 ID : 6306802332323  
Option 4 ID : 6306802332322  
Status : Answered  
Chosen Option : 3

**Q.7** Select the correct spelling of the incorrectly spelt word in the given sentence.

Good characteristics are indispensable to succeed in life.

- Ans
- ☐ 1. Indespensable
  - ☐ 2. Indespensible
  - ☐ 3. Indispensible
  - ☒ 4. Indispensable

Question ID : 6306801320364

Option 1 ID : 6306805196012

Option 2 ID : 6306805196014

Option 3 ID : 6306805196011

Option 4 ID : 6306805196013

Status : Answered

Chosen Option : 4

**Q.8** Select the option that can be used as a one-word substitute for the given group of words.

Someone who loves and admires himself the most

- Ans
- ☐ 1. Recluse
  - ☒ 2. Narcissist
  - ☐ 3. Altruist
  - ☐ 4. Omniscient

Question ID : 63068086330

Option 1 ID : 630680334751

Option 2 ID : 630680334749

Option 3 ID : 630680334750

Option 4 ID : 630680334748

Status : Answered

Chosen Option : 2

**Q.9** A sentence has been split up into segments and given below in jumbled order. While the first and the last segments of the sentence (1 and 6) are in the correct order, the segments in between are jumbled up. Arrange the segments in the correct order to form a meaningful and coherent sentence.

- 1) An outstanding feature of the 21<sup>st</sup> century has been
- P) greater security and education which
- Q) the improvement of the income and
- R) living conditions of the
- S) working man leading to
- 6) has meant greater political power.

- Ans
- ☒ 1. Q, R, S, P
  - ☐ 2. S, P, Q, R
  - ☐ 3. S, R, Q, P
  - ☐ 4. P, R, Q, S

Question ID : 630680295270

Option 1 ID : 6306801148804

Option 2 ID : 6306801148807

Option 3 ID : 6306801148806

Option 4 ID : 6306801148805

Status : Answered

Chosen Option : 1

**Q.10** Parts of a sentence are given below in jumbled order. Arrange the parts in the correct order to form a meaningful sentence.

Through the dense forest, / the hikers / trekked / for hours / before reaching / the mountain peak.

- Ans** ☒ 1. Through the dense forest for hours trekked the hikers before reaching the mountain peak.
- ☒ 2. The hikers trekked for hours through the dense forest before reaching the mountain peak.
- ☒ 3. Before reaching the mountain peak, the hikers through the dense forest trekked for hours.
- ☒ 4. The hikers for hours through the dense forest trekked before reaching the mountain peak.

Question ID : 630680745625

Option 1 ID : 6306802922676

Option 2 ID : 6306802922678

Option 3 ID : 6306802922677

Option 4 ID : 6306802922675

Status : Answered

Chosen Option : 2

**Q.11** Select the option that can be used as a one-word substitute for the given group of words.

Someone who walks on foot

- Ans** ☒ 1. Pedestrian
- ☒ 2. Auditor
- ☒ 3. Decanter
- ☒ 4. Stalker

Question ID : 630680105687

Option 1 ID : 630680410785

Option 2 ID : 630680410784

Option 3 ID : 630680410783

Option 4 ID : 630680410786

Status : Answered

Chosen Option : 1

**Q.12** Select the INCORRECTLY spelt word.

- Ans** ☒ 1. Apparent
- ☒ 2. Practitionaire
- ☒ 3. Recommend
- ☒ 4. Memento

Question ID : 6306801320329

Option 1 ID : 6306805195872

Option 2 ID : 6306805195874

Option 3 ID : 6306805195873

Option 4 ID : 6306805195871

Status : Answered

Chosen Option : 4

**Q.13** Select the most appropriate option to fill in the blank.

The blueberries in the basket are blue.  
The denotation of the word 'blue' is \_\_\_\_\_.

- Ans
- ☒ 1. gloominess
  - ☒ 2. sadness
  - ☒ 3. a colour
  - ☒ 4. negativity

Question ID : 630680147120

Option 1 ID : 630680569301

Option 2 ID : 630680569300

Option 3 ID : 630680569299

Option 4 ID : 630680569298

Status : Answered

Chosen Option : 1

**Q.14** Select the option that expresses the given sentence in reported speech.

The soldier said to his fellow soldiers, "I have buried our brave comrade here.

- Ans
- ☒ 1. The soldier told his fellow soldiers that he had buried their brave comrade there.
  - ☒ 2. The soldier told us that I had buried their brave comrade here.
  - ☒ 3. The soldier told his fellow soldiers that I had buried our brave comrade there.
  - ☒ 4. The soldier told us that he had buried our brave comrade there.

Question ID : 630680627778

Option 1 ID : 6306802457208

Option 2 ID : 6306802457210

Option 3 ID : 6306802457209

Option 4 ID : 6306802457207

Status : Answered

Chosen Option : 1

**Q.15** Select the most appropriate ANTONYM of the word given below.  
Ameliorate

- Ans
- ☒ 1. Recondite
  - ☒ 2. Motto
  - ☒ 3. Exacerbate
  - ☒ 4. Succour

Question ID : 630680166477

Option 1 ID : 630680644828

Option 2 ID : 630680644829

Option 3 ID : 630680644831

Option 4 ID : 630680644830

Status : Answered

Chosen Option : 3

**Q.16** Select the option that can be used as a one-word substitute for the given group of words.

Speaking disrespectfully about sacred or religious things

- Ans ☒ 1. Biped  
☒ 2. Belligerent  
☒ 3. Bigamy  
☒ 4. Blasphemy

Question ID : 63068069342  
Option 1 ID : 630680268049  
Option 2 ID : 630680268047  
Option 3 ID : 630680268048  
Option 4 ID : 630680268046  
Status : Answered  
Chosen Option : 4

**Q.17** Select the option that expresses the following sentence in passive voice.

After we come to power at the Centre, we will conduct a countrywide caste census.

- Ans ☒ 1. A countrywide caste census should be conducted by us when we come to power at the Centre.  
☒ 2. A countrywide caste census will be conducted by us as and when we come to power at the Centre.  
☒ 3. A countrywide caste census will be conducted by us after we come to power at the Centre.  
☒ 4. A countrywide caste census will have been conducted by us after we come to power at the Centre.

Question ID : 630680607348  
Option 1 ID : 6306802376543  
Option 2 ID : 6306802376541  
Option 3 ID : 6306802376544  
Option 4 ID : 6306802376542  
Status : Answered  
Chosen Option : 3

**Q.18** The following sentence has been split into four segments. Identify the segment that contains a grammatical error.  
I, you and she/ have been working happily/ in the same company and in the same branch/ for the last nine years.

- Ans ☒ 1. have been working happily  
☒ 2. I, you and she  
☒ 3. in the same company and in the same branch  
☒ 4. for the last nine years

Question ID : 630680176556  
Option 1 ID : 630680684449  
Option 2 ID : 630680684448  
Option 3 ID : 630680684450  
Option 4 ID : 630680684451  
Status : Answered  
Chosen Option : 2

Q.19 Select the most appropriate synonym of the given word.

Charisma

- Ans ☒ 1. Reputation  
☒ 2. Charm  
☒ 3. Atmosphere  
☒ 4. Influence

Question ID : 630680628622  
Option 1 ID : 6306802460543  
Option 2 ID : 6306802460544  
Option 3 ID : 6306802460542  
Option 4 ID : 6306802460545  
Status : Answered  
Chosen Option : 2

Q.20 Select the option that expresses the given sentence in passive voice.

Scientists have recently discovered a new species of marine life in the unexplored depths of the ocean.

- Ans ☒ 1. A new species of marine life was recently being discovered in the unexplored depths of the ocean by scientists.  
☒ 2. A new species of marine life has recently been discovered in the unexplored depths of the ocean by scientists.  
☒ 3. A new species of marine life had recently been discovered in the unexplored depths of the ocean by scientists.  
☒ 4. A new species of marine life was recently discovered in the unexplored depths of the ocean by scientists.

Question ID : 630680607346  
Option 1 ID : 6306802376535  
Option 2 ID : 6306802376536  
Option 3 ID : 6306802376534  
Option 4 ID : 6306802376533  
Status : Answered  
Chosen Option : 2

Q.21 Select the most appropriate option that can substitute the underlined words in the given sentence.

In the makeshift place of activity, debate or conflict, there were hundreds of people with the queen's team of advisors and servants sitting within the ring against the wall.

- Ans ☒ 1. dormitory  
☒ 2. casino  
☒ 3. arena  
☒ 4. aviary

Question ID : 630680669060  
Option 1 ID : 6306802619748  
Option 2 ID : 6306802619746  
Option 3 ID : 6306802619747  
Option 4 ID : 6306802619745  
Status : Answered  
Chosen Option : 3

Q.22 Select the most appropriate option to fill in the blank.

The comedian's jokes were so funny that the entire audience erupted in \_\_\_\_\_.

- Ans
- ☐ 1. latter
  - ☐ 2. later
  - ☐ 3. loiter
  - ☒ 4. laughter

Question ID : 630680539774  
Option 1 ID : 6306802110205  
Option 2 ID : 6306802110207  
Option 3 ID : 6306802110206  
Option 4 ID : 6306802110208  
Status : Answered  
Chosen Option : 4

Q.23 Select the option that expresses the given sentence in indirect speech.

Kanhaiya said to me, "Do you want to sing?"

- Ans
- ☐ 1. Kanhaiya said that I would sing or not.
  - ☐ 2. Kanhaiya said that whether I would sing.
  - ☒ 3. Kanhaiya asked me if I wanted to sing.
  - ☐ 4. Kanhaiya enquires if I want to sing.

Question ID : 630680628007  
Option 1 ID : 6306802458110  
Option 2 ID : 6306802458108  
Option 3 ID : 6306802458109  
Option 4 ID : 6306802458107  
Status : Answered  
Chosen Option : 3

Q.24 Complete the dialogue for Person B using the correct idiom.

Person A: We are all going to the club this weekend. Do you want to come?

Person B: Thank you for asking. But I don't like clubs. It's \_\_\_\_\_.

- Ans
- ☐ 1. my cup of coffee
  - ☐ 2. not my cup of coffee
  - ☒ 3. not my cup of tea
  - ☐ 4. not my cup, not my tea

Question ID : 630680333140  
Option 1 ID : 6306801295835  
Option 2 ID : 6306801295833  
Option 3 ID : 6306801295836  
Option 4 ID : 6306801295834  
Status : Answered  
Chosen Option : 3



**Q.25** Select the option that expresses the given sentence in passive voice.

**Don't park your car here.**

- Ans** ☒ 1. Let your car be parked here.  
☒ 2. Let not your car be parked here.  
☒ 3. Let your car not be parked here.  
☒ 4. Have not your car be parked here.

Question ID : **630680627574**  
Option 1 ID : **6306802456399**  
Option 2 ID : **6306802456400**  
Option 3 ID : **6306802456398**  
Option 4 ID : **6306802456401**  
Status : **Answered**  
Chosen Option : **3**

**Q.26** Select the most appropriate option to fill in the blank.

**This is the \_\_\_\_\_ book that I have read till now.**

- Ans** ☒ 1. most interesting  
☒ 2. more interesting  
☒ 3. interesting  
☒ 4. better interest

Question ID : **630680617607**  
Option 1 ID : **6306802416657**  
Option 2 ID : **6306802416658**  
Option 3 ID : **6306802416659**  
Option 4 ID : **6306802416660**  
Status : **Answered**  
Chosen Option : **1**

**Q.27** Select the most appropriate article to fill in the blank.

**Rabindranath Tagore, \_\_\_\_\_ poet, was famous for his poetical work, Gitanjali.**

- Ans** ☒ 1. a  
☒ 2. the  
☒ 3. an  
☒ 4. no article required

Question ID : **630680166149**  
Option 1 ID : **630680643570**  
Option 2 ID : **630680643568**  
Option 3 ID : **630680643571**  
Option 4 ID : **630680643569**  
Status : **Answered**  
Chosen Option : **1**

**Q.28** The given sentence is divided into four segments. Identify the segment that contains a grammatical error.

When I returned to the office, / no work was left / as my friend Rahul / has done everything.

- Ans**
- ☒ 1. When I returned to the office,
  - ☒ 2. as my friend Rahul
  - ☒ 3. has done everything
  - ☒ 4. no work was left

Question ID : 630680157021

Option 1 ID : 630680607636

Option 2 ID : 630680607638

Option 3 ID : 630680607639

Option 4 ID : 630680607637

Status : Answered

Chosen Option : 1

**Q.29** Select the most appropriate **ANTONYM** of the given word.

**Melancholy**

- Ans**
- ☒ 1. Miserable
  - ☒ 2. Pleasant
  - ☒ 3. Profitable
  - ☒ 4. Mechanical

Question ID : 630680565677

Option 1 ID : 6306802211646

Option 2 ID : 6306802211644

Option 3 ID : 6306802211647

Option 4 ID : 6306802211645

Status : Answered

Chosen Option : 1

**Comprehension:**

In the following passage, some words have been deleted. Read the passage carefully and select the most appropriate option to fill in each blank.

The greatest disease in the West today is not TB or leprosy; it is being unwanted, unloved, and uncared for. We can cure (1)\_\_\_\_\_ diseases with medicine, but the only cure for loneliness, despair, and hopelessness is love. There are many in the world who are (2)\_\_\_\_\_ for a piece of bread but there are many more dying for a little love. The poverty in the West is a different kind of poverty – it is not only a poverty of (3)\_\_\_\_\_ but also of (4)\_\_\_\_\_. There's a hunger for affection as there is a hunger for God.

**SubQuestion No : 30**

**Q.30** Select the most appropriate option to fill in blank 1.

- Ans**
- ☒ 1. masculine
  - ☒ 2. stubborn
  - ☒ 3. radical
  - ☒ 4. physical

Question ID : 630680404891

Option 1 ID : 6306801579048

Option 2 ID : 6306801579049

Option 3 ID : 6306801579047

Option 4 ID : 6306801579050

Status : Answered

Chosen Option : 3

**Comprehension:**

In the following passage, some words have been deleted. Read the passage carefully and select the most appropriate option to fill in each blank.

The greatest disease in the West today is not TB or leprosy; it is being unwanted, unloved, and uncared for. We can cure (1)\_\_\_\_\_ diseases with medicine, but the only cure for loneliness, despair, and hopelessness is love. There are many in the world who are (2)\_\_\_\_\_ for a piece of bread but there are many more dying for a little love. The poverty in the West is a different kind of poverty – it is not only a poverty of (3)\_\_\_\_\_ but also of (4)\_\_\_\_\_. There's a hunger for affection as there is a hunger for God.

**SubQuestion No : 31**

**Q.31 Select the most appropriate option to fill in blank 2.**

- Ans ☒ 1. neglecting  
☒ 2. disregarding  
☒ 3. dying  
☒ 4. ignoring

Question ID : **630680404892**  
Option 1 ID : **6306801579051**  
Option 2 ID : **6306801579054**  
Option 3 ID : **6306801579053**  
Option 4 ID : **6306801579052**  
Status : **Answered**  
Chosen Option : **3**

**Comprehension:**

In the following passage, some words have been deleted. Read the passage carefully and select the most appropriate option to fill in each blank.

The greatest disease in the West today is not TB or leprosy; it is being unwanted, unloved, and uncared for. We can cure (1)\_\_\_\_\_ diseases with medicine, but the only cure for loneliness, despair, and hopelessness is love. There are many in the world who are (2)\_\_\_\_\_ for a piece of bread but there are many more dying for a little love. The poverty in the West is a different kind of poverty – it is not only a poverty of (3)\_\_\_\_\_ but also of (4)\_\_\_\_\_. There's a hunger for affection as there is a hunger for God.

**SubQuestion No : 32**

**Q.32 Select the most appropriate option to fill in blank 3.**

- Ans ☒ 1. lavishness  
☒ 2. loneliness  
☒ 3. profusion  
☒ 4. abundance

Question ID : **630680404893**  
Option 1 ID : **6306801579058**  
Option 2 ID : **6306801579057**  
Option 3 ID : **6306801579056**  
Option 4 ID : **6306801579055**  
Status : **Answered**  
Chosen Option : **2**

**Comprehension:**

In the following passage, some words have been deleted. Read the passage carefully and select the most appropriate option to fill in each blank.

The greatest disease in the West today is not TB or leprosy; it is being unwanted, unloved, and uncared for. We can cure (1)\_\_\_\_\_ diseases with medicine, but the only cure for loneliness, despair, and hopelessness is love. There are many in the world who are (2)\_\_\_\_\_ for a piece of bread but there are many more dying for a little love. The poverty in the West is a different kind of poverty – it is not only a poverty of (3)\_\_\_\_\_ but also of (4)\_\_\_\_\_. There's a hunger for affection as there is a hunger for God.

**SubQuestion No : 33**

**Q.33 Select the most appropriate option to fill in blank 4.**

- Ans ☒ 1. covetous  
☒ 2. spirituality  
☒ 3. educate  
☒ 4. materialistic

Question ID : 630680404894

Option 1 ID : 6306801579061

Option 2 ID : 6306801579062

Option 3 ID : 6306801579060

Option 4 ID : 6306801579059

Status : Answered

Chosen Option : 2

**Comprehension:**

Read the given passage and answer the questions that follow.

Reading is an important communication skill that has many benefits and it has great impact on a person's life. We should develop a reading habit as it allows us to learn new information and gives us access to a wide range of opportunities and ideas. So, reading regularly not only broadens our aspect and knowledge but also improves our intelligence, perspective, judgement and understanding of the world. It helps to stimulate creativity and imagination, to relieve the stress and pressure, and to provide a source of entertainment. The major benefit of reading is to develop the analytical and critical skills of a reader. The former involves gathering information and breaking it down into parts for better understanding, while the latter involves evaluating the same information and making judgments based on evidence. Reading a book or any content improves our language and vocabulary, so we can easily comprehend the words and their use in the context. It also helps in cognitive development in young children so at the primary level, children are more involved in reading rather than writing.

**SubQuestion No : 34**

**Q.34 Cognitive development in a child is related to:**

- Ans ☒ 1. social development  
☒ 2. mental development  
☒ 3. environmental development  
☒ 4. technical development

Question ID : 630680512954

Option 1 ID : 6306802004760

Option 2 ID : 6306802004758

Option 3 ID : 6306802004761

Option 4 ID : 6306802004759

Status : Answered

Chosen Option : 2

**Comprehension:**

Read the given passage and answer the questions that follow.

Reading is an important communication skill that has many benefits and it has great impact on a person's life. We should develop a reading habit as it allows us to learn new information and gives us access to a wide range of opportunities and ideas. So, reading regularly not only broadens our aspect and knowledge but also improves our intelligence, perspective, judgement and understanding of the world. It helps to stimulate creativity and imagination, to relieve the stress and pressure, and to provide a source of entertainment. The major benefit of reading is to develop the analytical and critical skills of a reader. The former involves gathering information and breaking it down into parts for better understanding, while the latter involves evaluating the same information and making judgments based on evidence. Reading a book or any content improves our language and vocabulary, so we can easily comprehend the words and their use in the context. It also helps in cognitive development in young children so at the primary level, children are more involved in reading rather than writing.

**SubQuestion No : 35**

**Q.35 Which skill is used by a reader when he gathers information and breaks it down in a logical pattern to solve a problem?**

- Ans
- ☒ 1. Speaking skill
  - ☒ 2. Analytical skill
  - ☒ 3. Reasoning skill
  - ☒ 4. Critical skill

Question ID : 630680512952

Option 1 ID : 6306802004752

Option 2 ID : 6306802004751

Option 3 ID : 6306802004753

Option 4 ID : 6306802004750

Status : Answered

Chosen Option : 2

**Comprehension:**

Read the given passage and answer the questions that follow.

Reading is an important communication skill that has many benefits and it has great impact on a person's life. We should develop a reading habit as it allows us to learn new information and gives us access to a wide range of opportunities and ideas. So, reading regularly not only broadens our aspect and knowledge but also improves our intelligence, perspective, judgement and understanding of the world. It helps to stimulate creativity and imagination, to relieve the stress and pressure, and to provide a source of entertainment. The major benefit of reading is to develop the analytical and critical skills of a reader. The former involves gathering information and breaking it down into parts for better understanding, while the latter involves evaluating the same information and making judgments based on evidence. Reading a book or any content improves our language and vocabulary, so we can easily comprehend the words and their use in the context. It also helps in cognitive development in young children so at the primary level, children are more involved in reading rather than writing.

**SubQuestion No : 36**

**Q.36 According to the passage, what is the role of reading?**

- Ans
- ☒ 1. To give strength to the body
  - ☒ 2. To learn new information to avail opportunity
  - ☒ 3. To not to share information
  - ☒ 4. To make environment healthy

Question ID : 630680512951

Option 1 ID : 6306802004746

Option 2 ID : 6306802004748

Option 3 ID : 6306802004747

Option 4 ID : 6306802004749

Status : Answered

Chosen Option : 2

**Comprehension:**

Read the given passage and answer the questions that follow.

Reading is an important communication skill that has many benefits and it has great impact on a person's life. We should develop a reading habit as it allows us to learn new information and gives us access to a wide range of opportunities and ideas. So, reading regularly not only broadens our aspect and knowledge but also improves our intelligence, perspective, judgement and understanding of the world. It helps to stimulate creativity and imagination, to relieve the stress and pressure, and to provide a source of entertainment. The major benefit of reading is to develop the analytical and critical skills of a reader. The former involves gathering information and breaking it down into parts for better understanding, while the latter involves evaluating the same information and making judgments based on evidence. Reading a book or any content improves our language and vocabulary, so we can easily comprehend the words and their use in the context. It also helps in cognitive development in young children so at the primary level, children are more involved in reading rather than writing.

**SubQuestion No : 37**

**Q.37 Which skill is used by a reader when he evaluates the same information and makes judgments based on evidence?**

- Ans
- ☒ 1. Analytical skill
  - ☒ 2. Drawing skill
  - ☒ 3. Technical skill
  - ☒ 4. Critical skill

Question ID : 630680512953

Option 1 ID : 6306802004754

Option 2 ID : 6306802004755

Option 3 ID : 6306802004757

Option 4 ID : 6306802004756

Status : Answered

Chosen Option : 4

**Comprehension:**

Read the given passage and answer the questions that follow.

The extraction of indigo dye involves harvesting the small, green leaves of the Indigofera plant before its flowers bloom. These leaves undergo a process of soaking in water and churning until a navy blue froth is released. The upper portion of the resulting mixture is drained for irrigation, while the leaves are repurposed as fertilizer. After allowing the water and fine sediment to settle for a day, the liquid is separated from the sediment. The obtained deep blue paste is then subjected to filtration to remove dirt and impurities, followed by compression into cakes and drying for several days. Once dried, the indigo is ready for use as a dye. Lime ( $\text{Ca}(\text{OH})_2$ ) can be added to the initial water and leaves mixture, and various natural sugars can be dissolved into the paste to enhance the extraction process.

**SubQuestion No : 38**

**Q.38 Select the most appropriate synonym of the word 'impurities' from the options given below.**

- Ans
- ☒ 1. cleanliness
  - ☒ 2. purity
  - ☒ 3. scum
  - ☒ 4. pureness

Question ID : 630680545663

Option 1 ID : 6306802133240

Option 2 ID : 6306802133243

Option 3 ID : 6306802133241

Option 4 ID : 6306802133242

Status : Answered

Chosen Option : 3

**Comprehension:**

Read the given passage and answer the questions that follow.

The extraction of indigo dye involves harvesting the small, green leaves of the Indigofera plant before its flowers bloom. These leaves undergo a process of soaking in water and churning until a navy blue froth is released. The upper portion of the resulting mixture is drained for irrigation, while the leaves are repurposed as fertilizer. After allowing the water and fine sediment to settle for a day, the liquid is separated from the sediment. The obtained deep blue paste is then subjected to filtration to remove dirt and impurities, followed by compression into cakes and drying for several days. Once dried, the indigo is ready for use as a dye. Lime ( $\text{Ca}(\text{OH})_2$ ) can be added to the initial water and leaves mixture, and various natural sugars can be dissolved into the paste to enhance the extraction process.

**SubQuestion No : 39**

**Q.39** In the extraction process described, what is the purpose of allowing the water and fine sediment at the bottom of the tank to settle for a day?

- Ans
- ☒ 1. To enhance the aroma of the indigo dye
  - ☒ 2. To create a unique texture in the final indigo paste
  - ☒ 3. To facilitate the separation of liquid from sediment
  - ☒ 4. To promote the growth of additional indigo leaves

Question ID : 630680545662

Option 1 ID : 6306802133237

Option 2 ID : 6306802133239

Option 3 ID : 6306802133238

Option 4 ID : 6306802133236

Status : Answered

Chosen Option : 3

**Comprehension:**

Read the given passage and answer the questions that follow.

The extraction of indigo dye involves harvesting the small, green leaves of the Indigofera plant before its flowers bloom. These leaves undergo a process of soaking in water and churning until a navy blue froth is released. The upper portion of the resulting mixture is drained for irrigation, while the leaves are repurposed as fertilizer. After allowing the water and fine sediment to settle for a day, the liquid is separated from the sediment. The obtained deep blue paste is then subjected to filtration to remove dirt and impurities, followed by compression into cakes and drying for several days. Once dried, the indigo is ready for use as a dye. Lime ( $\text{Ca}(\text{OH})_2$ ) can be added to the initial water and leaves mixture, and various natural sugars can be dissolved into the paste to enhance the extraction process.

**SubQuestion No : 40**

**Q.40** What is the overall tone of the passage?

- Ans
- ☒ 1. Informative and instructional
  - ☒ 2. Emotional and sentimental
  - ☒ 3. Critical and analytical
  - ☒ 4. Humorous and light-hearted

Question ID : 630680545661

Option 1 ID : 6306802133232

Option 2 ID : 6306802133235

Option 3 ID : 6306802133233

Option 4 ID : 6306802133234

Status : Answered

Chosen Option : 1

**Comprehension:**

Read the given passage and answer the questions that follow.

The extraction of indigo dye involves harvesting the small, green leaves of the Indigofera plant before its flowers bloom. These leaves undergo a process of soaking in water and churning until a navy blue froth is released. The upper portion of the resulting mixture is drained for irrigation, while the leaves are repurposed as fertilizer. After allowing the water and fine sediment to settle for a day, the liquid is separated from the sediment. The obtained deep blue paste is then subjected to filtration to remove dirt and impurities, followed by compression into cakes and drying for several days. Once dried, the indigo is ready for use as a dye. Lime ( $\text{Ca}(\text{OH})_2$ ) can be added to the initial water and leaves mixture, and various natural sugars can be dissolved into the paste to enhance the extraction process.

**SubQuestion No : 41**

**Q.41** What is the central theme of the passage describing the extraction process of indigo dye from the Indigofera plant?

- Ans
- ☒ 1. The cultivation and growth cycle of the Indigofera plant
  - ☒ 2. The various uses of indigo dye in different industries
  - ☒ 3. The impact of lime and natural sugars on the indigo extraction process
  - ☒ 4. The intricate process of harvesting and processing indigo leaves

Question ID : 630680545660

Option 1 ID : 6306802133228

Option 2 ID : 6306802133229

Option 3 ID : 6306802133231

Option 4 ID : 6306802133230

Status : Answered

Chosen Option : 4

**Comprehension:**

Read the given passage and answer the questions that follow.

Engaging in regular physical activity is not only beneficial for physical well-being but also has a profound impact on mental health. Studies have shown that exercise releases endorphins, chemicals in the brain that act as natural painkillers and mood elevators. Additionally, consistent exercise has been linked to reduced symptoms of anxiety and depression. Contrary to common misconceptions, it doesn't require intense workouts; even moderate activities like walking or yoga can contribute to improved mental well-being. Making exercise a regular part of one's routine not only supports physical fitness but also nurtures a positive and resilient mindset.

**SubQuestion No : 42**

**Q.42** Which of the following is a fact mentioned in the passage?

- Ans
- ☒ 1. Exercise releases endorphins, contributing to improved mental well-being.
  - ☒ 2. Exercise requires intense workouts for mental health benefits.
  - ☒ 3. Regular exercise has no impact on mental health.
  - ☒ 4. Only intense physical activities are linked to reduced anxiety and depression.

Question ID : 630680549189

Option 1 ID : 6306802147231

Option 2 ID : 6306802147229

Option 3 ID : 6306802147230

Option 4 ID : 6306802147232

Status : Answered

Chosen Option : 1



**Comprehension:**

Read the given passage and answer the questions that follow.

Engaging in regular physical activity is not only beneficial for physical well-being but also has a profound impact on mental health. Studies have shown that exercise releases endorphins, chemicals in the brain that act as natural painkillers and mood elevators. Additionally, consistent exercise has been linked to reduced symptoms of anxiety and depression. Contrary to common misconceptions, it doesn't require intense workouts; even moderate activities like walking or yoga can contribute to improved mental well-being. Making exercise a regular part of one's routine not only supports physical fitness but also nurtures a positive and resilient mindset.

SubQuestion No : 43

**Q.43 Determine the tone of the passage by choosing the option that reflects the overall emotional quality of the writing.**

- Ans
- ☒ 1. Critical
  - ☒ 2. Humorous
  - ☒ 3. Informative
  - ☒ 4. Dramatic

Question ID : 630680549230

Option 1 ID : 6306802147387

Option 2 ID : 6306802147386

Option 3 ID : 6306802147385

Option 4 ID : 6306802147388

Status : Answered

Chosen Option : 3

**Comprehension:**

Read the given passage and answer the questions that follow.

Engaging in regular physical activity is not only beneficial for physical well-being but also has a profound impact on mental health. Studies have shown that exercise releases endorphins, chemicals in the brain that act as natural painkillers and mood elevators. Additionally, consistent exercise has been linked to reduced symptoms of anxiety and depression. Contrary to common misconceptions, it doesn't require intense workouts; even moderate activities like walking or yoga can contribute to improved mental well-being. Making exercise a regular part of one's routine not only supports physical fitness but also nurtures a positive and resilient mindset.

SubQuestion No : 44

**Q.44 Select the option that provides an accurate summary of the main points discussed in the passage.**

- Ans
- ☒ 1. Engaging in regular physical activity positively impacts mental health by releasing endorphins and reducing symptoms of anxiety and depression.
  - ☒ 2. The passage discusses the negative effects of technology on health.
  - ☒ 3. Exercise requires intense workouts for mental health benefits.
  - ☒ 4. Exercise only impacts physical well-being, not mental health.

Question ID : 630680549231

Option 1 ID : 6306802147391

Option 2 ID : 6306802147392

Option 3 ID : 6306802147390

Option 4 ID : 6306802147389

Status : Answered

Chosen Option : 1

**Comprehension:**

Read the given passage and answer the questions that follow.

Engaging in regular physical activity is not only beneficial for physical well-being but also has a profound impact on mental health. Studies have shown that exercise releases endorphins, chemicals in the brain that act as natural painkillers and mood elevators. Additionally, consistent exercise has been linked to reduced symptoms of anxiety and depression. Contrary to common misconceptions, it doesn't require intense workouts; even moderate activities like walking or yoga can contribute to improved mental well-being. Making exercise a regular part of one's routine not only supports physical fitness but also nurtures a positive and resilient mindset.

SubQuestion No : 45

**Q.45** Select the most appropriate title for the given passage.

- Ans
- ☒ 1. The Impact of Technology on Health
  - ☒ 2. The Benefits of Mindfulness Meditation
  - ☒ 3. The Importance of a Balanced Diet
  - ☒ 4. Importance of Regular Physical Activities

Question ID : 630680549165

Option 1 ID : 6306802147132

Option 2 ID : 6306802147131

Option 3 ID : 6306802147129

Option 4 ID : 6306802147130

Status : Answered

Chosen Option : 4

Section : **Module II General Awareness**

**Q.1** Which theme encapsulates Wings India 2024, the Aviation Expo, that was inaugurated by Union Minister for Civil Aviation in January 2024?

- Ans
- ☒ 1. Aviation Expo-Wings India in Amrit Kaal: Shaping the Future of Indian Civil Aviation.
  - ☒ 2. Aviation and Sustainable Development in the Indian Aerospace: Future possibilities in Amrit Kaal.
  - ☒ 3. Advancements in Aerospace: A Glimpse into India's Aviation Future in Amrit Kaal.
  - ☒ 4. Connecting India to the World in Amrit Kaal: Setting the Stage for India Civil Aviation @2047.

Question ID : 630680571724

Option 1 ID : 6306802235804

Option 2 ID : 6306802235806

Option 3 ID : 6306802235805

Option 4 ID : 6306802235807

Status : Answered

Chosen Option : 1

**Q.2** The equation  $F = k \left( q_1 \times \frac{q_2}{r^2} \right)$  is representation of:

(Where F is the attractive or repulsive electric force of two point charges  $q_1$  and  $q_2$  and r is the distance between two charges)

- Ans
- ☒ 1. Coulomb's law
  - ☒ 2. Biot-Savart law
  - ☒ 3. Charle's law
  - ☒ 4. Ohm's law

Question ID : 630680305590

Option 1 ID : 6306801188734

Option 2 ID : 6306801188736

Option 3 ID : 6306801188733

Option 4 ID : 6306801188735

Status : Answered

Chosen Option : 2

Q.3 Which of the following is NOT the qualification for the appointment of judges of supreme court?

- Ans ☒ 1. An advocate of high court for at least ten years  
☒ 2. A distinguished judge in the opinion of the President  
☒ 3. A judge of high court for at least five years  
☒ 4. An advocate of supreme court for at least ten years

Question ID : 630680616228  
Option 1 ID : 6306802411592  
Option 2 ID : 6306802411594  
Option 3 ID : 6306802411591  
Option 4 ID : 6306802411593  
Status : Answered  
Chosen Option : 4

Q.4 Which letter code indicates mid-latitude desert climate in Köppen climate classification?

- Ans ☒ 1. Dw  
☒ 2. Cfa  
☒ 3. BWk  
☒ 4. EF

Question ID : 630680618279  
Option 1 ID : 6306802419446  
Option 2 ID : 6306802419448  
Option 3 ID : 6306802419445  
Option 4 ID : 6306802419447  
Status : Not Answered  
Chosen Option : --

Q.5 The Kushan emperor Kanishka, who ruled from the late first to the early/mid-second century AD was the \_\_\_\_\_ Kushan ruler.

- Ans ☒ 1. second  
☒ 2. third  
☒ 3. fourth  
☒ 4. fifth

Question ID : 630680511614  
Option 1 ID : 6306801999578  
Option 2 ID : 6306801999579  
Option 3 ID : 6306801999580  
Option 4 ID : 6306801999581  
Status : Answered  
Chosen Option : 2

Q.6 Which endemic species of owl of Central India is listed as Endangered in the IUCN Red List since 2018?

- Ans ☒ 1. Long-eared Owlet  
☒ 2. Barn Owlet  
☒ 3. Forest Owlet  
☒ 4. Snowy Owlet

Question ID : 630680618938  
Option 1 ID : 6306802422030  
Option 2 ID : 6306802422031  
Option 3 ID : 6306802422028  
Option 4 ID : 6306802422029  
Status : Answered  
Chosen Option : 1

**Q.7** In which year was the fluid mosaic model proposed by Singer and Nicolson? The model commonly represented cell membrane structure and dynamics.

- Ans** ☒ 1. 1960  
☒ 2. 1981  
☒ 3. 1993  
☒ 4. 1972

Question ID : 630680618488

Option 1 ID : 6306802420281

Option 2 ID : 6306802420283

Option 3 ID : 6306802420284

Option 4 ID : 6306802420282

Status : Answered

Chosen Option : 1

**Q.8** What is the primary goal of the International Comparison Programme (ICP), led by the United Nations Statistics Division (UNSD)?

- Ans** ☒ 1. To implement statistical offices globally  
☒ 2. To calculate Purchasing Power Parities (PPPs) and price level indices  
☒ 3. To produce unemployment estimates globally  
☒ 4. To collect data on international trade

Question ID : 630680618857

Option 1 ID : 6306802421708

Option 2 ID : 6306802421706

Option 3 ID : 6306802421707

Option 4 ID : 6306802421709

Status : Answered

Chosen Option : 2

**Q.9** Which amino acid is a precursor to serotonin, a neurotransmitter that regulates your appetite, sleep and mood?

- Ans** ☒ 1. Tryptophan  
☒ 2. Isoleucine  
☒ 3. Valine  
☒ 4. Methionine

Question ID : 630680618472

Option 1 ID : 6306802420218

Option 2 ID : 6306802420217

Option 3 ID : 6306802420219

Option 4 ID : 6306802420220

Status : Not Answered

Chosen Option : --

**Q.10 Which of the following is the headquarters of the South Central Zone of Indian Railways?**

- Ans** ☒ 1. Jabalpur  
☒ 2. Secunderabad  
☒ 3. Hajipur  
☒ 4. Bilaspur

Question ID : 630680663574

Option 1 ID : 6306802597942

Option 2 ID : 6306802597939

Option 3 ID : 6306802597941

Option 4 ID : 6306802597940

Status : Answered

Chosen Option : 2

**Q.11 According to Census of India 2011, what was the recorded population growth rate of Hindu religion?**

- Ans** ☒ 1. 16.8%  
☒ 2. 14.3%  
☒ 3. 18.5%  
☒ 4. 11.7%

Question ID : 630680569753

Option 1 ID : 6306802227806

Option 2 ID : 6306802227805

Option 3 ID : 6306802227807

Option 4 ID : 6306802227804

Status : Not Answered

Chosen Option : --

**Q.12 What is the name of the software launched by the National Minorities Development and Finance Corporation (NMDFC) for digitising loan accounting processes and integrating the MIS portal, including the release of mobile apps for Android and IOS?**

- Ans** ☒ 1. LOAN-X (Loan Accounting Network for NMDFC)  
☒ 2. MILAN (Minority Loan Accounting for NMDFC)  
☒ 3. DIGIT (Digital Integration for Government Transactions)  
☒ 4. MILAP (Minority Loan Accounting Software for Projects)

Question ID : 630680580390

Option 1 ID : 6306802270451

Option 2 ID : 6306802270453

Option 3 ID : 6306802270450

Option 4 ID : 6306802270452

Status : Answered

Chosen Option : 1

Q.13 Which of the following is NOT an antecedent river in India?

- Ans ☒ 1. Ganga  
☒ 2. Yamuna  
☒ 3. Kosi  
☒ 4. Indus

Question ID : 630680644612  
Option 1 ID : 6306802523757  
Option 2 ID : 6306802523758  
Option 3 ID : 6306802523759  
Option 4 ID : 6306802523756  
Status : Answered  
Chosen Option : 4

Q.14 Which substance is commonly used as an acid-base indicator, which turns red in acidic solutions and blue in basic solutions?

- Ans ☒ 1. Litmus paper  
☒ 2. Methyl orange  
☒ 3. Phenol  
☒ 4. Bromothymol blue

Question ID : 630680572262  
Option 1 ID : 6306802237906  
Option 2 ID : 6306802237907  
Option 3 ID : 6306802237904  
Option 4 ID : 6306802237905  
Status : Answered  
Chosen Option : 1

Q.15 In which of the following years did Mahatma Gandhi lead the Satyagraha and hunger strike for the first time in India?

- Ans ☒ 1. 1917  
☒ 2. 1919  
☒ 3. 1918  
☒ 4. 1920

Question ID : 6306801162474  
Option 1 ID : 6306804569267  
Option 2 ID : 6306804569269  
Option 3 ID : 6306804569268  
Option 4 ID : 6306804569270  
Status : Answered  
Chosen Option : 2

Q.16 In which of the following cases did the Supreme court of India give a ruling that, 'in case of any conflict between the fundamental rights and the directive principles, the former would prevail'?

- Ans ☒ 1. Champakam Doraijan Case, 1951  
☒ 2. Keshvananda Bharti Case, 1973  
☒ 3. Golaknath Case. 1967  
☒ 4. Minerva Mills Case, 1980

Question ID : 630680758985  
Option 1 ID : 6306802974895  
Option 2 ID : 6306802974897  
Option 3 ID : 6306802974896  
Option 4 ID : 6306802974898  
Status : Answered  
Chosen Option : 3

Q.17 Who was the first sultan (in the recorded history of the Dargah Sharif) to visit the shrine of Khwaja Muinuddin Chisti?

- Ans
- ☒ 1. Jalaluddin Khilji
  - ☒ 2. Balban
  - ☒ 3. Alauddin Khilji
  - ☒ 4. Muhammad bin Tughluq

Question ID : 630680362742

Option 1 ID : 6306801412723

Option 2 ID : 6306801412722

Option 3 ID : 6306801412721

Option 4 ID : 6306801412724

Status : Answered

Chosen Option : 3

Q.18 Which international treaty was adopted in 1992 to combat global warming and prepare for its effects?

- Ans
- ☒ 1. Vienna Convention for the Protection of the Ozone Layer
  - ☒ 2. Minamata Convention on Mercury
  - ☒ 3. Stockholm Convention on Persistent Organic Pollutants
  - ☒ 4. United Nations Framework Convention on Climate Change

Question ID : 630680618275

Option 1 ID : 6306802419430

Option 2 ID : 6306802419431

Option 3 ID : 6306802419432

Option 4 ID : 6306802419429

Status : Answered

Chosen Option : 4

Q.19 Who set a new Guinness World Record for the fastest badminton shot, measuring a speed of 565 km/hr in July 2023?

- Ans
- ☒ 1. Kidambi Srikanth
  - ☒ 2. Saina Nehwal
  - ☒ 3. PV Sindhu
  - ☒ 4. Satwiksairaj Rankireddy

Question ID : 630680575051

Option 1 ID : 6306802249025

Option 2 ID : 6306802249026

Option 3 ID : 6306802249024

Option 4 ID : 6306802249027

Status : Answered

Chosen Option : 1

Q.20 When did James Chadwick prove the existence of the neutron – an elementary particle devoid of any electric charge?

- Ans
- ☒ 1. 1920
  - ☒ 2. 1932
  - ☒ 3. 1941
  - ☒ 4. 1955

Question ID : 630680618166

Option 1 ID : 6306802419005

Option 2 ID : 6306802419006

Option 3 ID : 6306802419007

Option 4 ID : 6306802419008

Status : Answered

Chosen Option : 2

**Q.21 Who among the following was the President of India when India launched its first Nuclear test in Pokhran?**

- Ans** ☒ 1. Dr APJ Abdul Kalam  
☒ 2. Giani Zail Singh  
☒ 3. VV Giri  
☒ 4. Fakhruddin ali Ahmed

Question ID : 630680761432

Option 1 ID : 6306802984656

Option 2 ID : 6306802984655

Option 3 ID : 6306802984653

Option 4 ID : 6306802984654

Status : Answered

Chosen Option : 4

**Q.22 Who discovered the laws of levers and pulleys, which allow us to move heavy objects using small forces?**

- Ans** ☒ 1. Archimedes  
☒ 2. Pythagoras  
☒ 3. Eudoxus  
☒ 4. Democritus

Question ID : 630680618160

Option 1 ID : 6306802418981

Option 2 ID : 6306802418983

Option 3 ID : 6306802418982

Option 4 ID : 6306802418984

Status : Answered

Chosen Option : 3

**Q.23 The productivity of which of the following crops had initially increased due to the Green Revolution?**

- Ans** ☒ 1. Rice and cotton  
☒ 2. Wheat and sugarcane  
☒ 3. Rice and pulses  
☒ 4. Wheat and rice

Question ID : 630680607909

Option 1 ID : 6306802378819

Option 2 ID : 6306802378818

Option 3 ID : 6306802378820

Option 4 ID : 6306802378817

Status : Answered

Chosen Option : 4



**Q.24 Which of the following best defines liberalisation?**

- Ans** ☒ 1. The process of maintaining existing government regulations and restrictions on economic activities.
- ☒ 2. The process of reducing or removing government regulations and restrictions on economic activities.
- ☒ 3. The process of increasing government regulations and restrictions on economic activities.
- ☒ 4. The process of enforcing strict government control over economic activities.

Question ID : 630680637560

Option 1 ID : 6306802495957

Option 2 ID : 6306802495958

Option 3 ID : 6306802495956

Option 4 ID : 6306802495959

Status : Answered

Chosen Option : 2

**Q.25 In which sport did India defeat Pakistan 2-1 to lift the Men's Junior Asia Cup in 2023, overtaking them in winning the maximum titles at the prestigious event?**

- Ans** ☒ 1. Basketball
- ☒ 2. Hockey
- ☒ 3. Football
- ☒ 4. Badminton

Question ID : 630680579880

Option 1 ID : 6306802268411

Option 2 ID : 6306802268410

Option 3 ID : 6306802268412

Option 4 ID : 6306802268413

Status : Answered

Chosen Option : 2

Section : **Module I Computer Knowledge Module**

**Q.1 Which file extension is most commonly used for executable installation files on a Windows system?**

- Ans** ☒ 1. .exe
- ☒ 2. .mp3
- ☒ 3. .txt
- ☒ 4. .jpg

Question ID : 6306801313375

Option 1 ID : 6306805168248

Option 2 ID : 6306805168251

Option 3 ID : 6306805168250

Option 4 ID : 6306805168249

Status : Answered

Chosen Option : 1

**Q.2 ROM is primarily used for which of the following purposes?**

- Ans**
- ☐ 1. Random data access
  - ☐ 2. Temporary data storage
  - ☐ 3. Storing files for permanent access
  - ☒ 4. Storing the BIOS or firmware

Question ID : 6306801305893

Option 1 ID : 6306805138479

Option 2 ID : 6306805138476

Option 3 ID : 6306805138478

Option 4 ID : 6306805138477

Status : Answered

Chosen Option : 4

**Q.3 What is the purpose of enabling passwords on a PC?**

- Ans**
- ☐ 1. For improving the data signal strength
  - ☒ 2. For providing an additional layer of security
  - ☐ 3. For reducing the installed applications
  - ☐ 4. For printing of the data in the PC

Question ID : 630680995500

Option 1 ID : 6306803906004

Option 2 ID : 6306803906003

Option 3 ID : 6306803906005

Option 4 ID : 6306803906006

Status : Answered

Chosen Option : 2

**Q.4 Which of the following actions can typically be performed in the Outbox?**

- Ans**
- ☐ 1. Viewing archived emails
  - ☐ 2. Deleting received emails
  - ☒ 3. Editing emails that are yet to be sent
  - ☐ 4. Managing contact lists

Question ID : 630680993896

Option 1 ID : 6306803899683

Option 2 ID : 6306803899681

Option 3 ID : 6306803899682

Option 4 ID : 6306803899684

Status : Answered

Chosen Option : 3

**Q.5 Which of the following scenarios correctly illustrates the interdependence of system software and application software?**

- Ans**
- ☒ 1. An antivirus program relying on system utilities to perform disk scans and remove malware.
  - ☐ 2. A word processor functioning independently without the need for an operating system.
  - ☐ 3. An operating system requiring a media player to manage hardware resources.
  - ☐ 4. A device driver operating as application software to provide printing functionality.

Question ID : 6306801296506

Option 1 ID : 6306805100693

Option 2 ID : 6306805100692

Option 3 ID : 6306805100695

Option 4 ID : 6306805100694

Status : Answered

Chosen Option : 1

**Q.6 Which keyboard shortcut is used to increase the indent in a paragraph in MS Word 2010?**

- Ans**
- ☐ 1. Ctrl + U
  - ☐ 2. Ctrl + D
  - ☒ 3. Ctrl + M
  - ☐ 4. Ctrl + K

Question ID : 630680995382

Option 1 ID : 6306803905546

Option 2 ID : 6306803905543

Option 3 ID : 6306803905544

Option 4 ID : 6306803905545

Status : Answered

Chosen Option : 3

**Q.7 How can you exit a slide show and return to editing mode in MS PowerPoint?**

- Ans**
- ☐ 1. Press Ctrl + S
  - ☒ 2. Press Esc
  - ☐ 3. Press Spacebar
  - ☐ 4. Press Alt + Tab

Question ID : 630680978961

Option 1 ID : 6306803839827

Option 2 ID : 6306803839825

Option 3 ID : 6306803839826

Option 4 ID : 6306803839828

Status : Answered

Chosen Option : 2

**Q.8 The \_\_\_\_\_ method is commonly used to verify the integrity of data.**

- Ans**
- ☒ 1. Hashing
  - ☐ 2. Caching
  - ☐ 3. Duplication
  - ☐ 4. Compression

Question ID : 630680990659

Option 1 ID : 6306803886972

Option 2 ID : 6306803886973

Option 3 ID : 6306803886975

Option 4 ID : 6306803886974

Status : Answered

Chosen Option : 1

**Q.9 What are the correct steps for creating a blank presentation in MS PowerPoint?**

- Ans**
- ☒ 1. File -> New -> Blank Presentation
  - ☐ 2. File -> Blank Presentation -> New
  - ☐ 3. New -> Blank Presentation -> File
  - ☐ 4. Blank Presentation -> New -> File

Question ID : 630680993339

Option 1 ID : 6306803897492

Option 2 ID : 6306803897494

Option 3 ID : 6306803897493

Option 4 ID : 6306803897495

Status : Answered

Chosen Option : 1

**Q.10 Which option in MS Word allows a user to align text within a document to the left, center, right, or justify it across the page?**

- Ans** ☒ 1. Font Style: Changes the appearance of text but does not affect its alignment
- ☒ 2. Paragraph Alignment: Adjusts the alignment of text to the left, center, right, or justifies it
- ☒ 3. Line Spacing: Adjusts the space between lines of text but does not affect text alignment
- ☒ 4. Text Direction: Changes the orientation of the text, such as vertical or horizontal, but not its alignment

Question ID : 630680994002  
Option 1 ID : 6306803900097  
Option 2 ID : 6306803900099  
Option 3 ID : 6306803900100  
Option 4 ID : 6306803900098  
Status : Answered  
Chosen Option : 2

**Q.11 What type of media is commonly used for WAN communication?**

- Ans** ☒ 1. HDMI Cable
- ☒ 2. Twisted Pair Cable
- ☒ 3. Fiber Optic Cable
- ☒ 4. Coaxial Cable

Question ID : 6306801308865  
Option 1 ID : 6306805150290  
Option 2 ID : 6306805150287  
Option 3 ID : 6306805150289  
Option 4 ID : 6306805150288  
Status : Answered  
Chosen Option : 3

**Q.12 What happens when a user inserts a new row into an MS Excel worksheet?**

- Ans** ☒ 1. The existing rows are shifted to the right.
- ☒ 2. The existing data in the row is overwritten.
- ☒ 3. The existing rows are shifted down.
- ☒ 4. The new row is added at the bottom of the worksheet.

Question ID : 630680992589  
Option 1 ID : 6306803894630  
Option 2 ID : 6306803894631  
Option 3 ID : 6306803894629  
Option 4 ID : 6306803894628  
Status : Answered  
Chosen Option : 3

**Q.13 Why do desktop and laptop operating systems require more advanced memory management techniques than embedded systems?**

- Ans** ☒ 1. They utilise more hardware resources and need dynamic memory allocation.
- ☒ 2. Memory management is not necessary for desktop and laptop operating systems.
- ☒ 3. They run only one application at a time, simplifying memory management.
- ☒ 4. They rely on static memory allocation due to limited hardware resources.

Question ID : 6306801313221  
Option 1 ID : 6306805167614  
Option 2 ID : 6306805167617  
Option 3 ID : 6306805167615  
Option 4 ID : 6306805167616  
Status : Answered  
Chosen Option : 1

**Q.14** What does the function COUNT() do in MS Excel 2010?

- Ans**
- ☐ 1. Prints the number of cells
  - ☒ 2. Counts the number of cells
  - ☐ 3. Duplicates the number of cells
  - ☐ 4. Stores the number of cells

Question ID : 630680994774

Option 1 ID : 6306803903116

Option 2 ID : 6306803903115

Option 3 ID : 6306803903117

Option 4 ID : 6306803903118

Status : Answered

Chosen Option : 2

**Q.15** In a Local Area Network (LAN), which of the following is most commonly used to ensure that data packets are efficiently forwarded to the correct device, based on its MAC address?

- Ans**
- ☐ 1. Router
  - ☐ 2. Bridge
  - ☐ 3. Hub
  - ☒ 4. Layer 3 Switch

Question ID : 6306801301414

Option 1 ID : 6306805120559

Option 2 ID : 6306805120557

Option 3 ID : 6306805120556

Option 4 ID : 6306805120558

Status : Answered

Chosen Option : 4

**Q.16** Which of the following statements about the Central Processing Unit (CPU) is/are correct?

The CPU is often referred to as the 'brain' of the computer.

The CPU consists of three main units: the control unit (CU), arithmetic logic unit (ALU), and cache memory.

- Ans**
- ☐ 1. Neither 1 nor 2
  - ☐ 2. Only 2
  - ☒ 3. Only 1
  - ☐ 4. Both 1 and 2

Question ID : 6306801312610

Option 1 ID : 6306805165249

Option 2 ID : 6306805165247

Option 3 ID : 6306805165246

Option 4 ID : 6306805165248

Status : Answered

Chosen Option : 3

Q.17 What is the size of each ASCII character in bits?

- Ans
- ☐ 1. 4 bits
  - ☐ 2. 16 bits
  - ☒ 3. 8 bits
  - ☐ 4. 5 bits

Question ID : 6306801272148  
Option 1 ID : 6306805003022  
Option 2 ID : 6306805003025  
Option 3 ID : 6306805003024  
Option 4 ID : 6306805003023  
Status : Answered  
Chosen Option : 2

Q.18 What is a common sign that a computer might be infected with a virus?

- Ans
- ☐ 1. Improved system security
  - ☒ 2. Unusual system slowdowns and unexpected errors
  - ☐ 3. Faster system boot times
  - ☐ 4. Increased hard drive space

Question ID : 630680994650  
Option 1 ID : 6306803902648  
Option 2 ID : 6306803902650  
Option 3 ID : 6306803902647  
Option 4 ID : 6306803902649  
Status : Answered  
Chosen Option : 2

Q.19 In a multipart email message, what does the boundary parameter in the Content-Type header signify?


- Ans
- ☐ 1. It defines the length of the email message.
  - ☐ 2. It separates the email's body from the attachments.
  - ☒ 3. It marks the start and end of each part in a multipart message.
  - ☐ 4. It limits the file size of each attachment.

Question ID : 6306801301370  
Option 1 ID : 6306805120381  
Option 2 ID : 6306805120380  
Option 3 ID : 6306805120382  
Option 4 ID : 6306805120383  
Status : Answered  
Chosen Option : 2

Q.20 What is the role of User Account Control (UAC) in Windows when modifying system settings?

- Ans
- ☐ 1. To monitor memory usage and performance
  - ☐ 2. To adjust display settings
  - ☐ 3. To automate software updates
  - ☒ 4. To prompt for permission before making system-wide changes

Question ID : 6306801313312  
Option 1 ID : 6306805167992  
Option 2 ID : 6306805167995  
Option 3 ID : 6306805167994  
Option 4 ID : 6306805167993  
Status : Answered  
Chosen Option : 4



Exam stock



Govt. job Updates

DAILY CURRENT AFFAIR AND GK



Telegram



Website



YouTube